

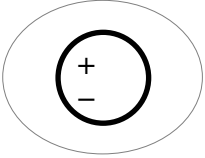
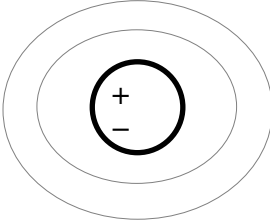
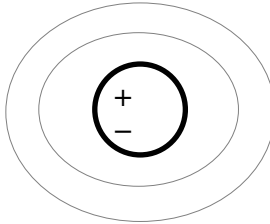
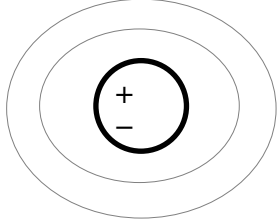
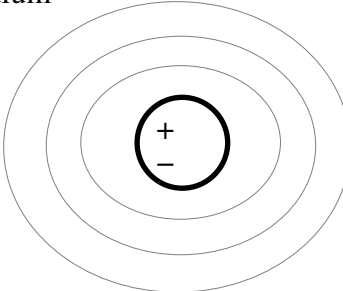
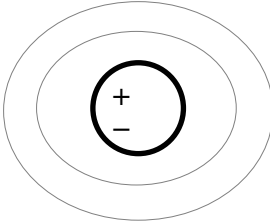
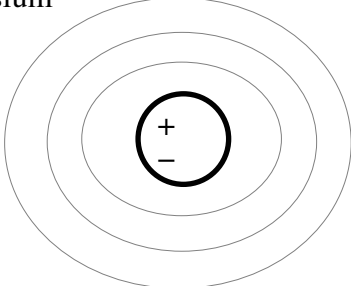
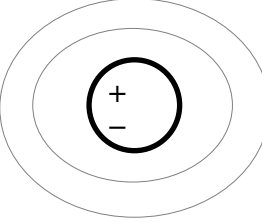
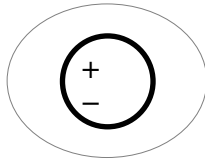
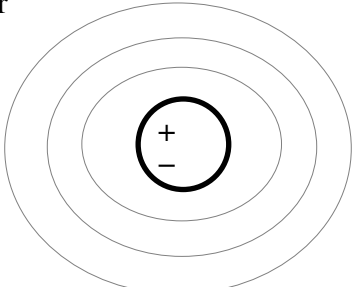
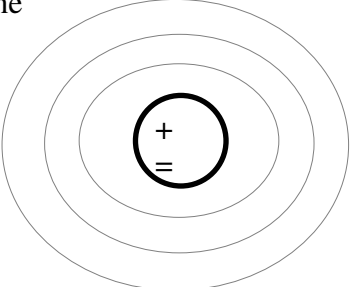
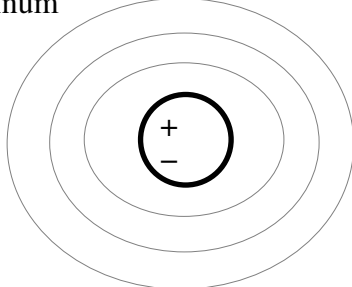
Drawing Atoms

Name _____

Date _____

Period _____

Using your periodic table, draw the atoms shown below.

<p>Helium</p> 	<p>Beryllium</p> 	<p>Nitrogen</p> 
<p>Boron</p> 	<p>Sodium</p> 	<p>Neon</p> 
<p>Magnesium</p> 	<p>Fluorine</p> 	<p>Hydrogen</p> 
<p>Sulfur</p> 	<p>Chlorine</p> 	<p>Aluminum</p> 
<p>Lithium</p>	<p>Carbon</p>	<p>Phosphorus</p>

Draw Oxygen, Silicon, Argon, Potassium, and Calcium on the back of this paper.